






2



- Kijk.
- Los op.



$$24 + 60 = 84$$



$$81 + 10 = 91$$



$$40 + 41 = 40 + 40 + 1 = 81$$



_____ □ □

$$\textcircled{70} + 12 = \underline{70 + 10 + 2} = 82$$

$$\begin{array}{r} +10 \\ +2 \end{array}$$

_____ □ □ □

$$\textcircled{33} + \textcircled{30} = \underline{63}$$

_____ □ □

$$\textcircled{80} + 12 = \underline{80 + 10 + 2} = 92$$

$$\begin{array}{r} +10 \\ +2 \end{array}$$


X

- 3**
- Kijk.
 - Vul in.
 - Los op.

lv



_____ □ □

$$\textcircled{62} + \textcircled{20} = \underline{82}$$




$$\begin{array}{r} 21 \\ 3 \end{array} + \begin{array}{r} 70 \\ 3 \end{array} = \begin{array}{r} 91 \\ 3 \end{array}$$

lv



$$\begin{array}{r} 50 \\ 3 \end{array} + \begin{array}{r} 25 \\ 3 \end{array} = 50 + 20 + 5 = 75$$



$\begin{array}{c} T \quad E \\ \swarrow \quad \searrow \\ +20 \quad +5 \end{array}$





$$\begin{array}{r} 10 \\ 3 \end{array} + \begin{array}{r} 28 \\ 3 \end{array} = 10 + 20 + 5 = 35$$

$\begin{array}{c} +20 \quad +5 \end{array}$

- 4 • Teken staafjes of blokjes bij.
• Los op.



$$\begin{array}{r} 46 \\ 3 \end{array} + \begin{array}{r} 30 \\ 3 \end{array} = \begin{array}{r} 76 \\ 3 \end{array}$$



$$\begin{array}{r} 40 \\ 3 \end{array} + 15 = 40 + 10 + 5 = 55$$

$\begin{array}{c} +10 \quad +5 \end{array}$

